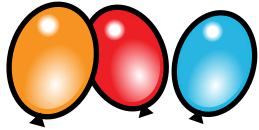


Groups of 3

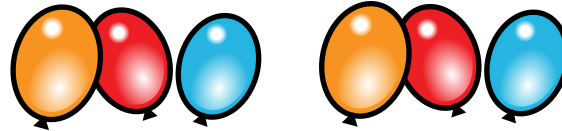


Answer the questions below and see how many groups of 3 you can find.



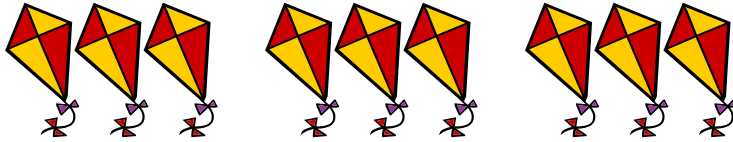
How many groups of 3 balloons? _____

How many balloons altogether? _____



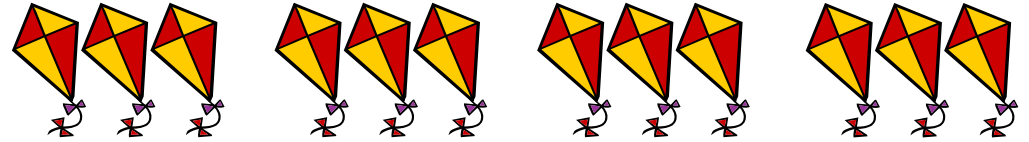
How many groups of 3 balloons? _____

How many balloons in total? _____



How many groups of 3 kites? _____

How many kites in total? _____



How many groups of 3 kites? _____

How many kites altogether? _____



How many groups of 3 balls? _____

How many balls altogether? _____



How many groups of 3 balls? _____

How many balls in total? _____



How many groups of 3 butterflies? _____

How many butterflies altogether? _____



How many groups of 3 butterflies? _____

How many butterflies in total? _____